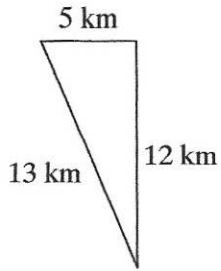
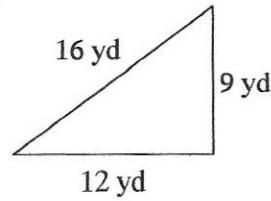


State if each triangle is a right triangle. (Hint: Check if side lengths given make pythagorean theorem true)

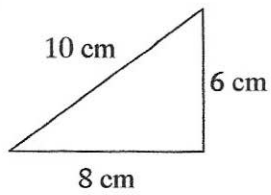
1)



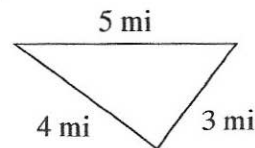
2)



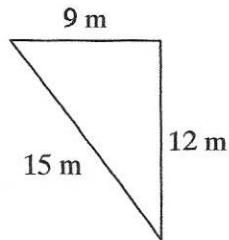
3)



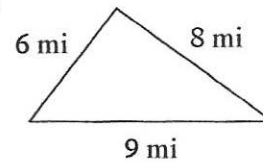
4)



5)

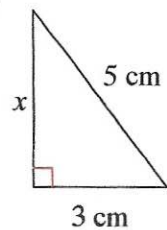


6)

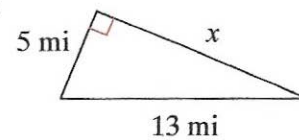


Find the missing side of each triangle. Round your answers to the nearest tenth if necessary.

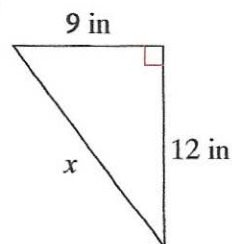
7)



8)



9)



10)

